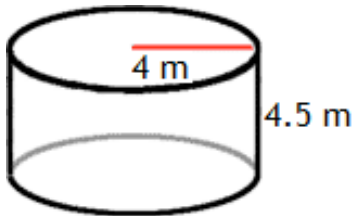


Name _____ Hour _____

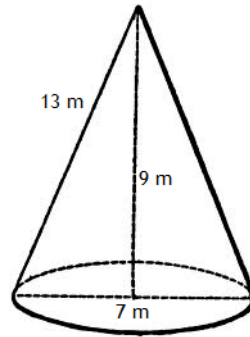
More Volume! (Day 3)

Find the volume of each figure. Use the π key if necessary. Round answers to the nearest hundredth.

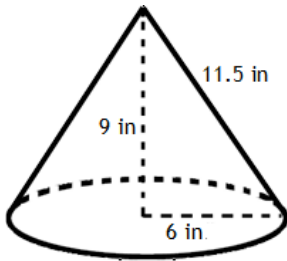
1.



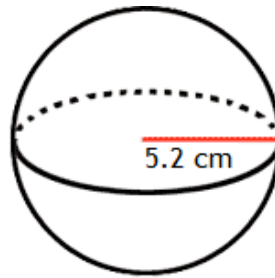
2.



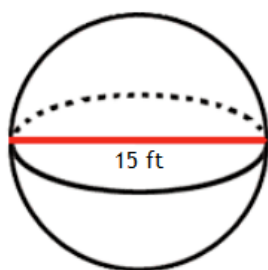
3.



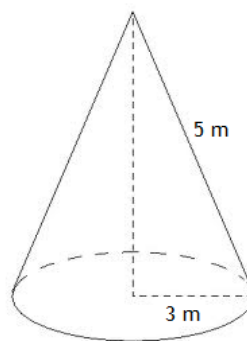
4.



5.



6. (Hint: Be sure to look at the given dimensions carefully)



7. If the diameter of Pluto is 600 miles, and we assume it is a perfect sphere, what is the volume of its Northern Hemisphere?

8. Find the radius of a cylinder whose volume is 125 cubic feet and height is 7 feet.

9. Find the volume.

